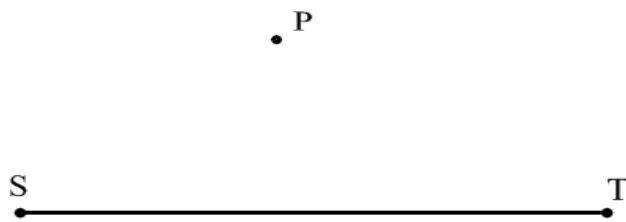


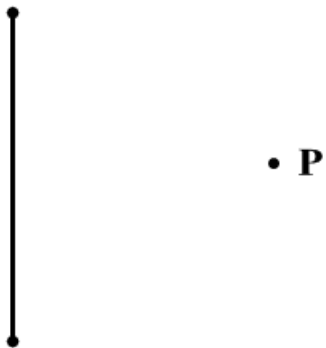
Name: _____
Lesson 1.4: Constructing Perpendicular and Parallel Lines

Date: _____
CC Geometry

Construct a perpendicular line through a point off of the given line segment.



Practice: Construct a line perpendicular to the given line which passes through point P.

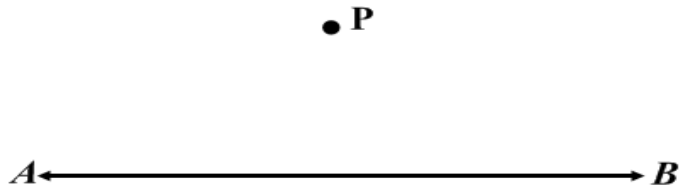


Construct a **PERPENDICULAR** line through a point on a given line.



Construct a line PARALLEL to a given line and through a given point.

Directions: use the steps for copying an angle



Directions: Construct a line parallel to the given line which passes through point P.

